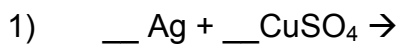
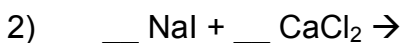


Section 3: Predicting the products of chemical reactions

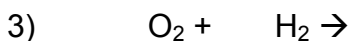
Predict the products of the following reactions:



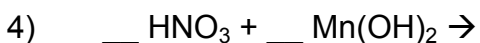
Type: _____



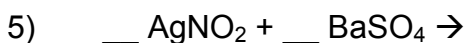
Type: _____



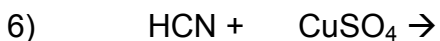
Type: _____



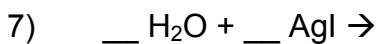
Type: _____



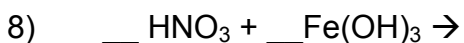
Type: _____



Type: _____



Type: _____



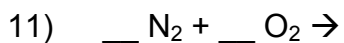
Type: _____



Type: _____



Type: _____



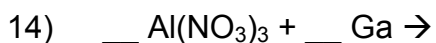
Type: _____



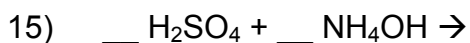
Type: _____



Type: _____



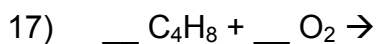
Type: _____



Type: _____



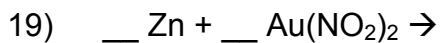
Type: _____



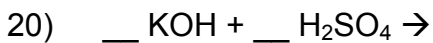
Type: _____



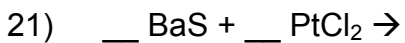
Type: _____



Type: _____



Type: _____



Type: _____



Type: _____